

Time: 10 Minutes

Paper Math 4

Total Marks: 10


6th Month, 2nd Week, 2nd Day Syllabus: Unit 6: Exercise No. 4 Q No. 2

Q.No.1. Find the area of the given figures:


(10)

سوال نمبر 1: درج ذیل اشکال کا رقبہ معلوم کریں:

(i)



(ii)




---



---



---



---



---

Time: 10 Minutes

Paper Math 4

Total Marks: 10


6th Month, 2nd Week, 2nd Day Syllabus: Unit 6: Exercise No. 4 Q No. 2

Q.No.1. Find the area of the given figures:


(10)

سوال نمبر 1: درج ذیل اشکال کا رقبہ معلوم کریں:

(i)



(ii)




---



---



---



---



---

Time: 10 Minutes

Paper Math 4

Total Marks: 10

6th Month, 2nd Week, 2nd Day Syllabus: Unit 6: Exercise No. 4 Q No. 2

Q.No.1. Find the area of the given figures:


(10)

سوال نمبر 1: درج ذیل اشکال کا رقبہ معلوم کریں:

(i)



(ii)




---



---



---



---



---

Time: 10 Minutes

Paper Math 4

Total Marks: 10

6th Month, 2nd Week, 2nd Day Syllabus: Unit 6: Exercise No. 4 Q No. 2

Q.No.1. Find the area of the given figures:


(10)

سوال نمبر 1: درج ذیل اشکال کا رقبہ معلوم کریں:

(i)



(ii)




---



---



---



---



---